

Name : _____


Score : _____

Teacher : _____


Date : _____

Identify the Lines, Rays or Line Segments.


1)




2)




3)




4)




5)




6)




7)



8)



9)



Name : _____


Score : _____

Teacher : _____

Date : _____


Identify the Lines, Rays or Line Segments.

1)




Line Segment

2)




Ray

3)




Ray

4)




Ray

5)




Ray

6)




Line Segment

7)




Line

8)



Line

9)



Line